




Solving problems

Solve problems and reason mathematically



Calculate the answer to these problems.



- 1 Buy 8 boxes of pears and 2 boxes of lemons. How many pieces of fruit altogether?

- 2 Boxes of oranges are split into bags of 4 oranges per bag. How many bags of oranges can be made?

- 3 Buy 3 boxes of strawberries. Eat 35. How many strawberries left?

- 4 Buy 8 boxes of mangoes and 8 boxes of apples. How many pieces of fruit altogether?

- 5 Mangoes cost £2 each. How much does it cost for 4 boxes of mangoes?

- 6 Buy one box of each fruit. How many pieces of fruit altogether?

- 7 Buy 3 boxes of pears and 4 boxes of apples. How many more apples than pears are there?

- 8 Buy 3 boxes of apples. Buy 4 boxes of pears. Which fruit do you have more of?