


Date: \_\_\_\_\_

# Museum multiplication and division


Solve problems using the multiplication and division facts for the 2, 5 and 10 times tables



 Caie buys 5 sweets. He spends 25p.


○  ○

Each sweets costs  p.

 Rosa buys 2 ice-creams. She spends 24p.


○  ○

Each ice-creams costs  p.

 Evie buys 12 lollipops.


○  ○

She spends  p.

 Cavan buys 8 dinosaurs.


○  ○

He spends  p.

 Yasmin buys 5 notebooks. She spends 50p.

○  ○

Each notebook cost  p.

 Nye buys 6 pencils.

○  ○

He spends  p.

### Teacher's notes

Children look at each word problem and work out the answer using multiplication or division. For the division problems, they write the cost of each item on the label next to each one when they find the answer.

