

How many bricks?

Solve problems about mass



2 blocks



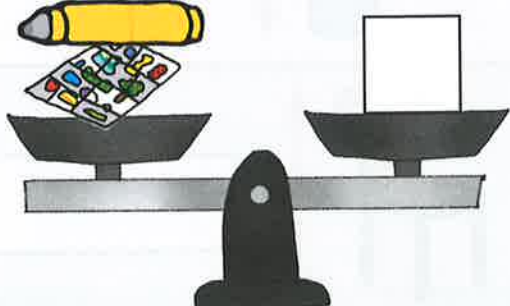
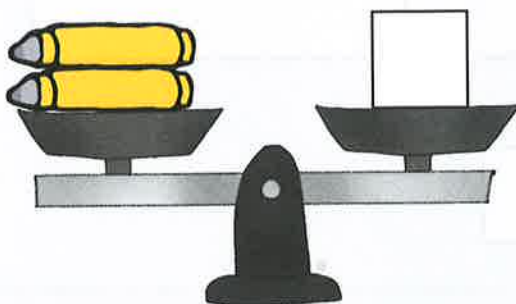
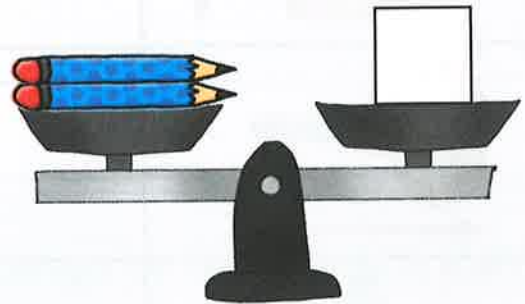


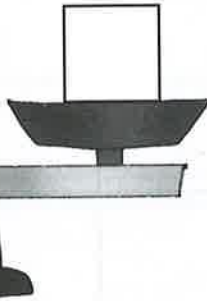
5 blocks



1 block



3 blocks



Teacher's notes

Children work out the different weight combinations of each pair of objects then write the number of blocks that are needed to make it balance.

Will put A set but to t and pos

Col Pub

An The 1 Lc Lon SE1

B W

© H 10 ISBN

The autr

All r repr form reco the l Unit 90 T

Briti A Ca Britis

Covr Inter Desi Illus

Print