

Name: \_\_\_\_\_ Date: \_\_\_\_\_

# How many bricks?

Solve problems about mass



3 bricks









6 bricks



2 bricks



8 bricks



The book  is  bricks heavier than the teddy .

The pencil  is  bricks lighter than the book .

### Teacher's notes

Children work out the different weight combinations of each pair of items on one side of the balance. They then write the number of bricks that are needed to make it balance. Finally, they complete the questions.