



Butterfly Doubles

Write the number sentence for each butterfly double.



$6 + 6 = \underline{\hspace{2cm}}$




$7 + 7 = \underline{\hspace{2cm}}$



$8 + 8 = \underline{\hspace{2cm}}$



$9 + 9 = \underline{\hspace{2cm}}$



$10 + 10 = \underline{\hspace{2cm}}$