

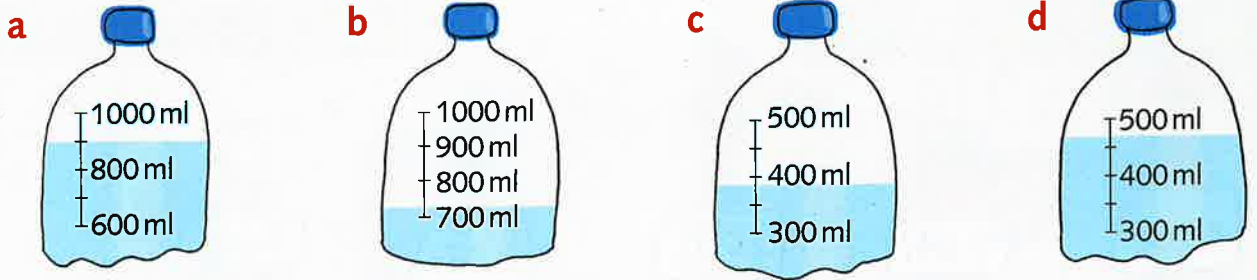
Estimating and rounding capacity




Estimate and compare capacity and round numbers on measuring jugs

Challenges
1,2

1 Estimate the amount of liquid in each bottle to the nearest 100 ml.



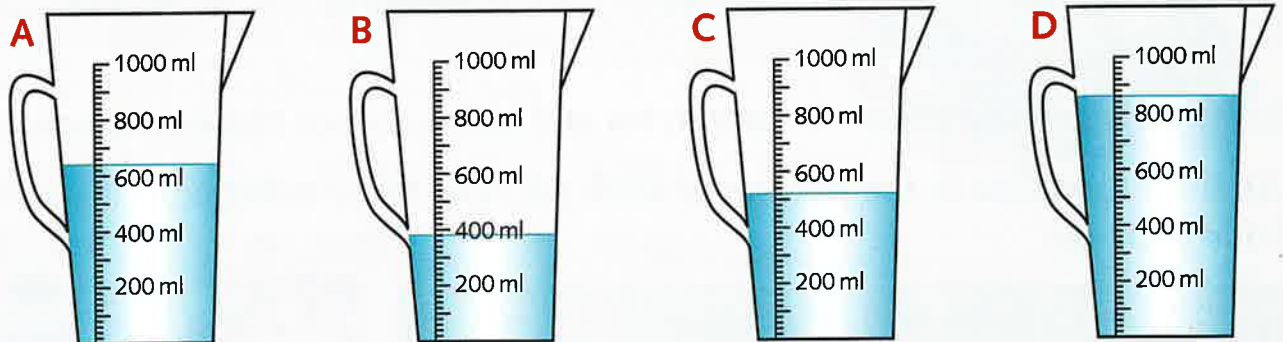
2 Round the amount of liquid in each container to the nearest litre.



Challenge
2

For each of the four measuring jugs write the amount of liquid:

- a in millilitres
- b rounded to the nearest 100 ml



Challenge
3

The table shows the engine capacity of a family car. Copy and complete the table for cars with these engine capacities.

- a 1612 ml b 1775 ml
- c 1990 ml d 2235 ml

Capacity in ml	Rounded to nearest:		Capacity in litres
	10 ml	100 ml	
1385	1390	1400	1.4